

$$\sum V = 0$$

$$V_a + 36 = 0$$

$$V_a = -36$$

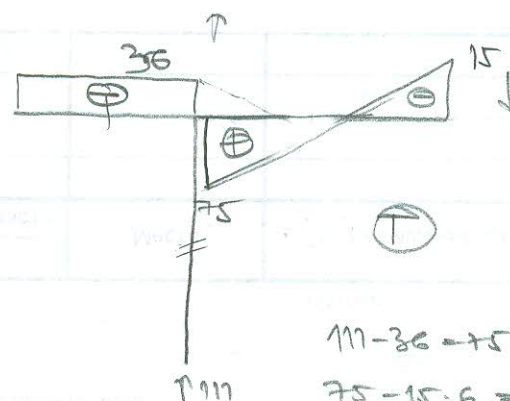
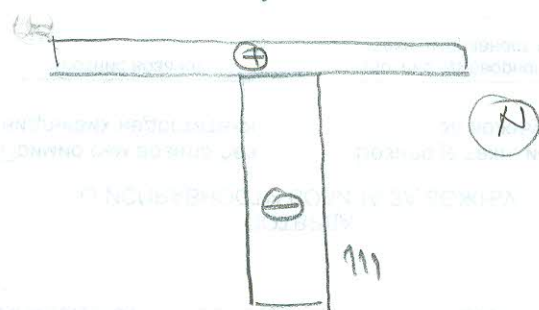
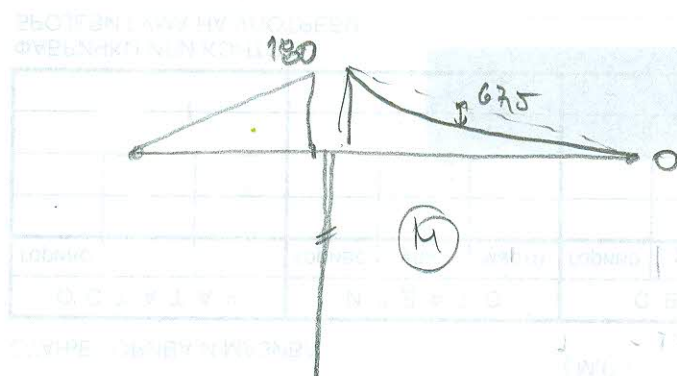
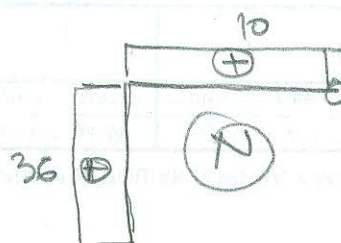
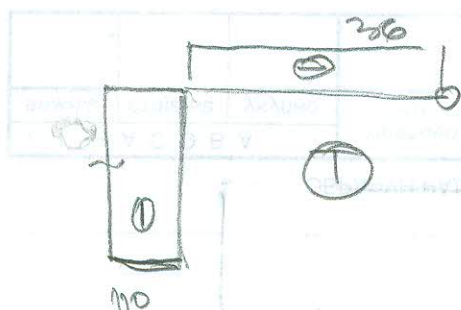
$$\sum H = 0$$

$$H_a + 100 + 10 = 0$$

$$H_a = -110$$

Kontrola $\sum M_a = 0$

$$100 \cdot 3 - 150 + 10 \cdot 3 - 36 \cdot 5 = 0$$



$$111 - 36 = 75$$

$$75 - 15 \cdot 6 = -15$$