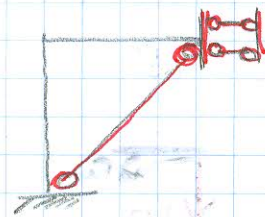


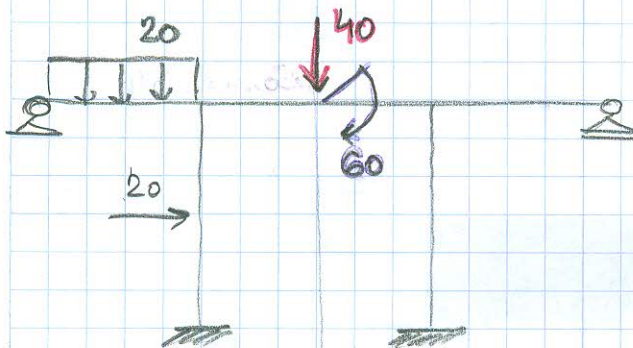
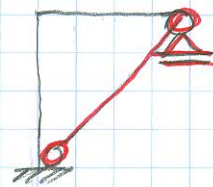
(S)

$$u_a = 0 \quad e_a = 0 \quad v_a \neq 0$$

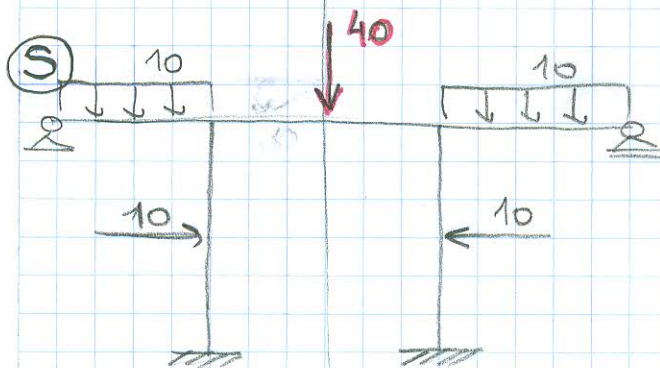


(A)

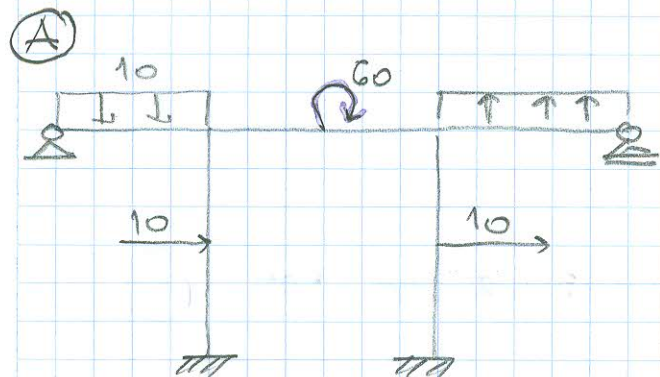
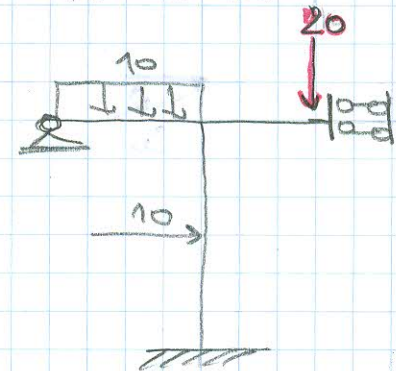
$$v_a = 0 \quad u_a \neq 0 \quad e_a \neq 0$$



TRANSVERZALNE SILE ULAZE  
U SIMETRIJU, A MOMENTI  
U ANTI METRIJU



$$v_a \neq 0 \quad u_a = e_a = 0$$



$$v_a = 0 \quad u_a \neq 0 \quad e_a \neq 0$$

